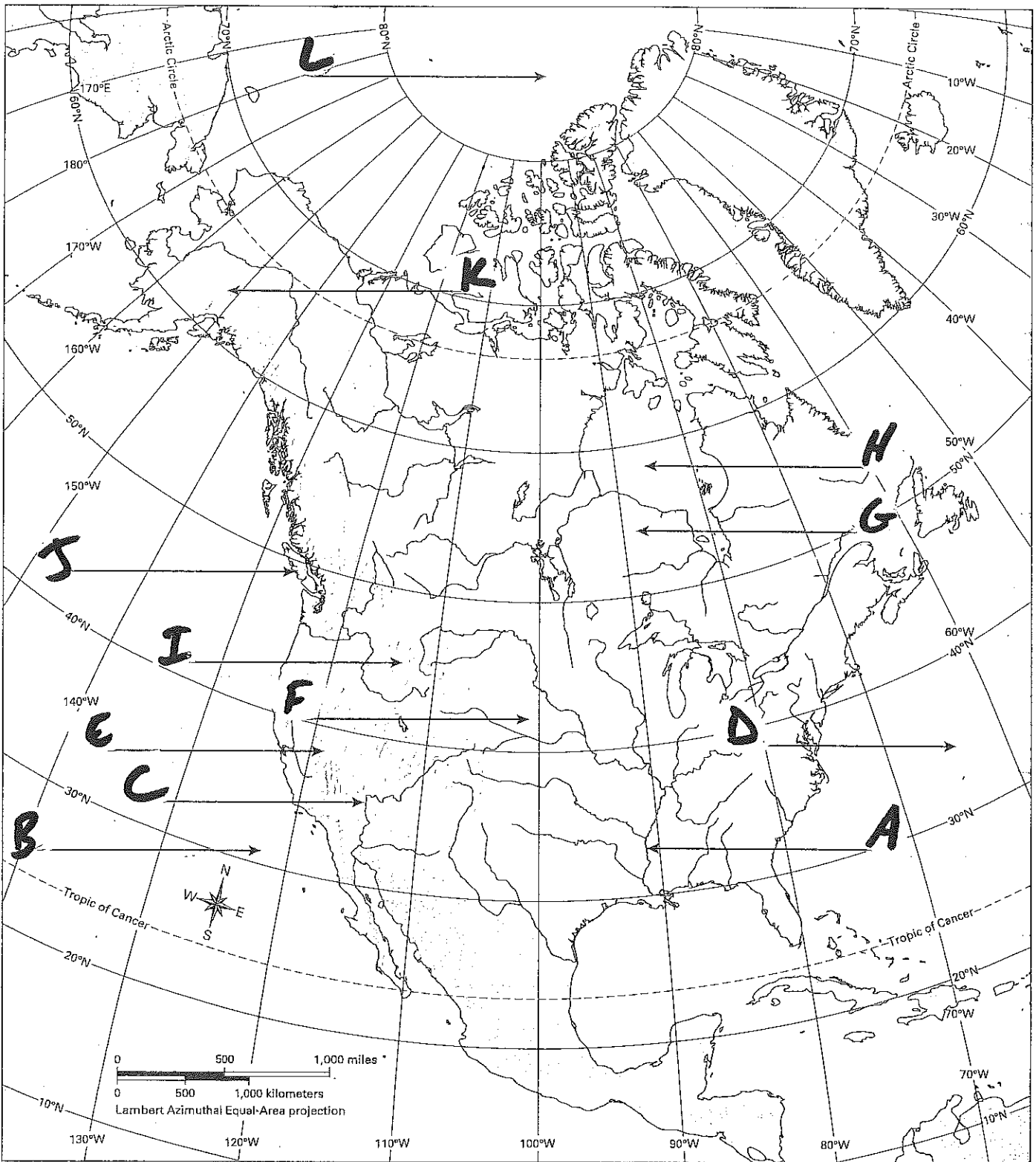


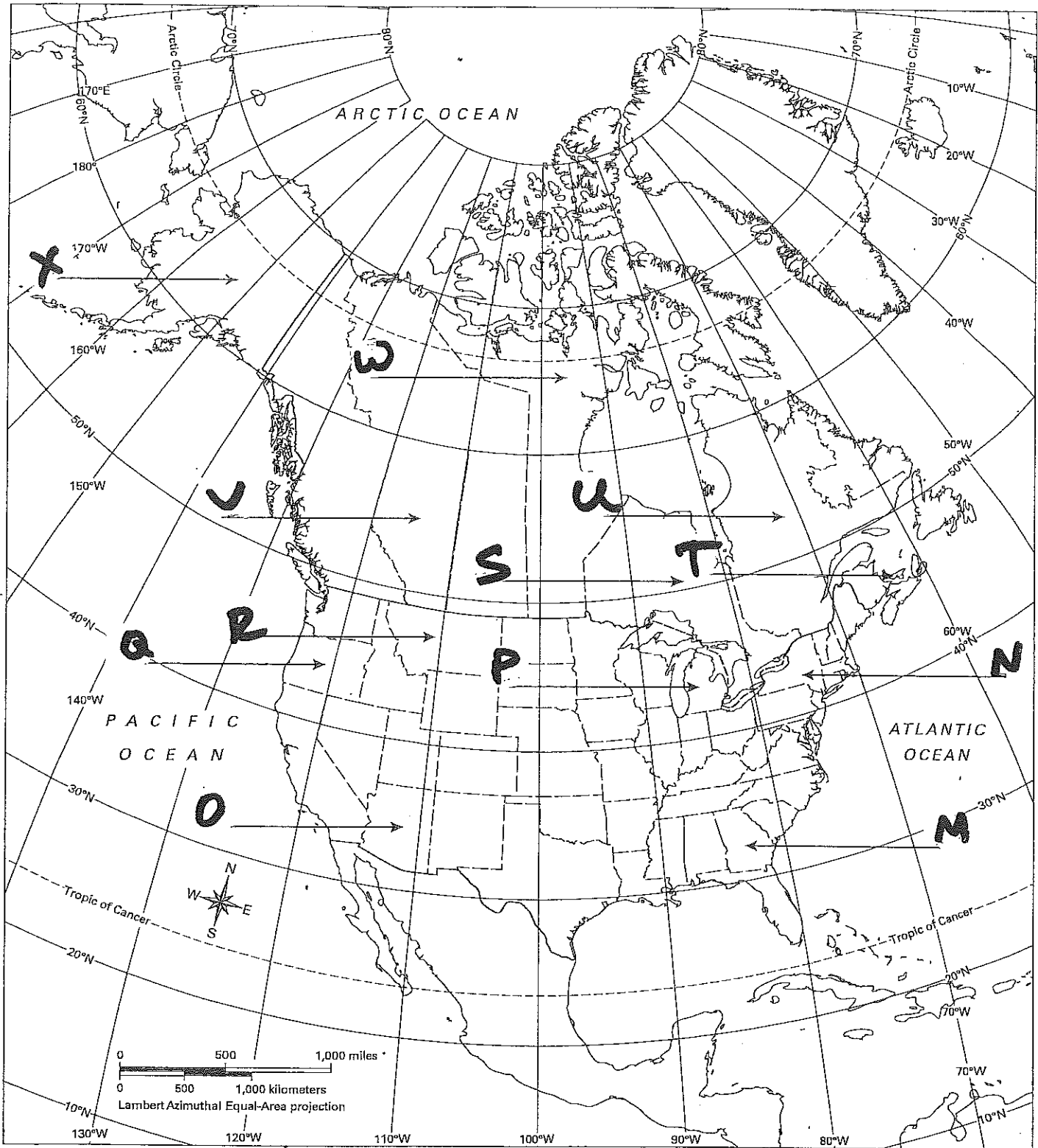
JAME:

On the map below, 12 important physical features of the region are numbered from 1 to 12. Their names are listed in the Answer Bank. Write the name of each physical feature on the line next to each number.



Answer Bank Arctic Ocean Atlantic Ocean Canadian Shield Colorado River Great Plains Hudson Bay
Mississippi River Mount McKinley Pacific Ocean Rocky Mountains Sierra Nevada Vancouver Island

On the map below, 12 states, provinces, or territories of the region are numbered from 13 to 24. Their names are listed in the Answer Bank. Write the name of each place on the line next to each number.



Answer Bank
 Alaska Alberta Arizona Georgia Michigan Montana New York Nunavut
 Ontario Oregon Prince Edward Island Quebec

Use the information and skills you learned from the Mapping Lab to answer Questions 25–30.

25. What is the most common type of vegetation in the central area of both southern Canada and the United States?

- A. temperate grasslands
- B. desert scrub
- C. deciduous forest
- D. coniferous forest

26. Which of the following is the largest urban center in Canada?

- A. Calgary
- B. Montreal
- C. Toronto
- D. Vancouver

27. Which resource is most abundant in Texas, Alaska, and Alberta?

- A. coal
- B. hydroelectric power
- C. petroleum
- D. precious metals

Use the ^{atlas} ~~transparency or teacher's projection~~ to help answer Questions 28–30.

28. Which of these climate zones covers most of Canada?

- A. subarctic
- B. humid continental
- C. marine west coast
- D. tundra

29. Which of these states, provinces, or territories is mostly located in a tundra climate zone?

- A. Alaska
- B. Ontario
- C. Nunavut
- D. Quebec

30. Which of these places has a humid continental climate?

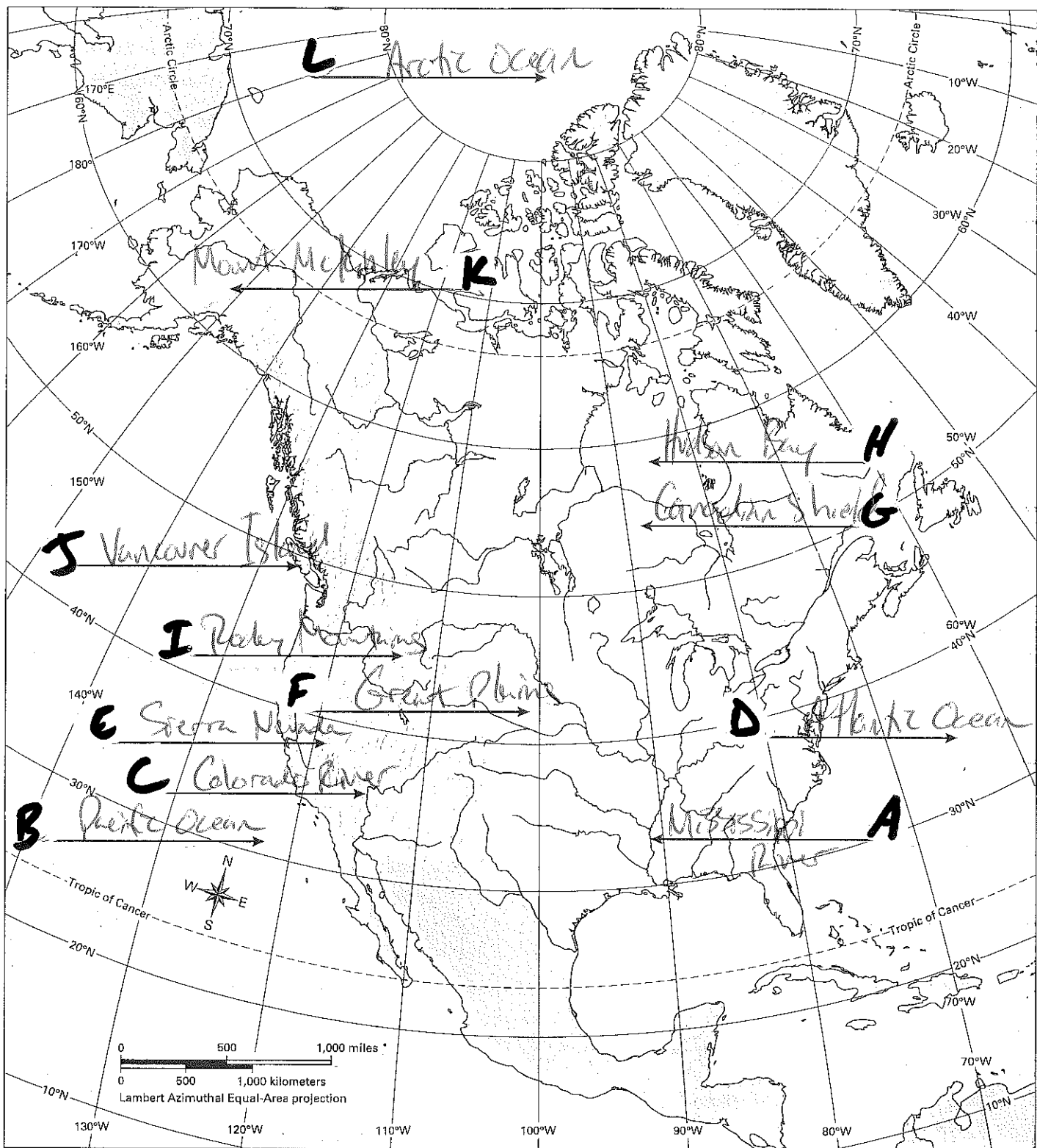
- A. Florida
- B. Massachusetts
- C. Prince Edward Island
- D. Texas

United States and Canada Map Test Review

NAME: Key

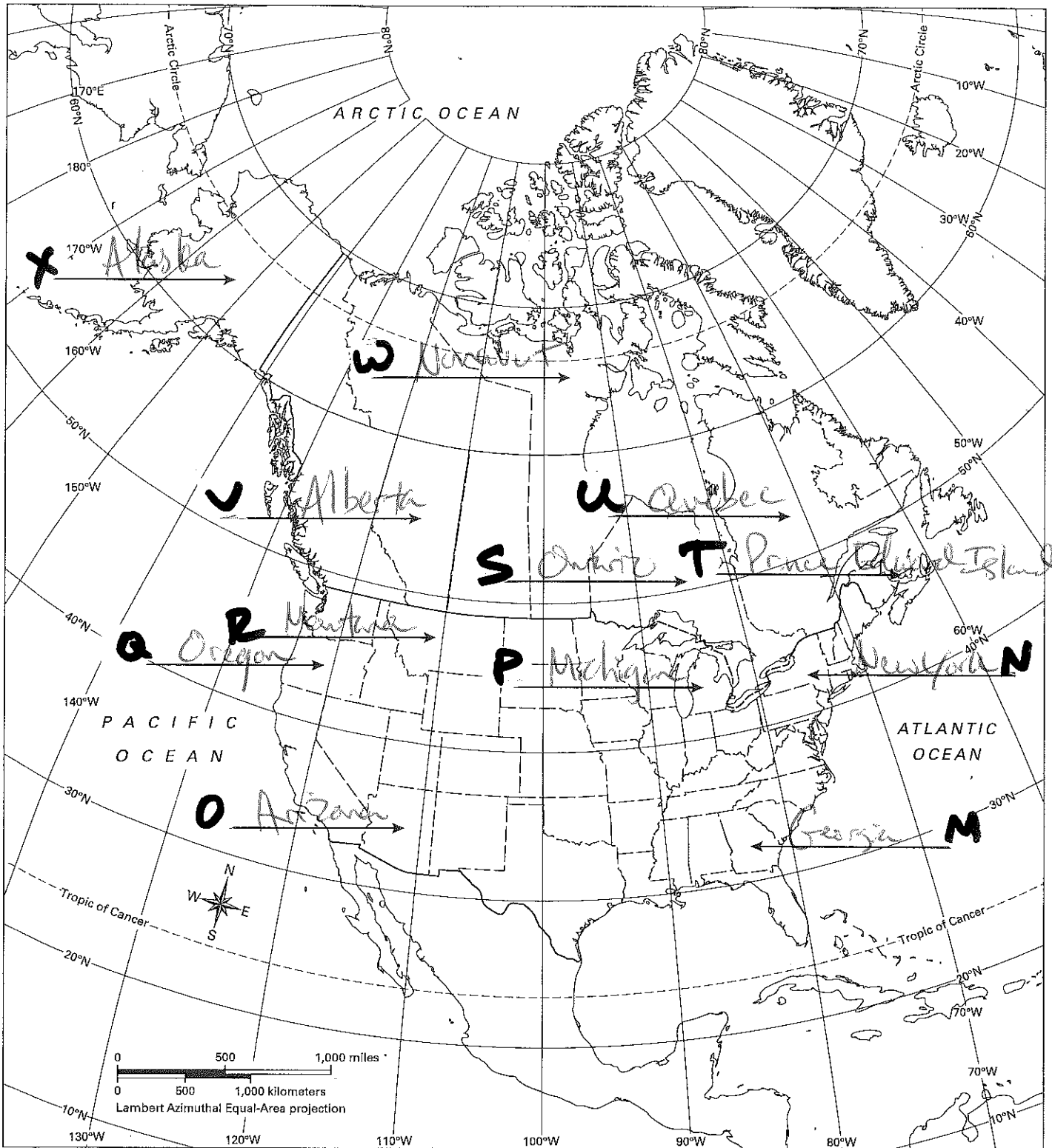
Canada and the United States Assessment

On the map below, 12 important physical features of the region are numbered from 1 to 12. Their names are listed in the Answer Bank. Write the name of each physical feature on the line next to each number.



Answer Bank Arctic Ocean Atlantic Ocean Canadian Shield Colorado River Great Plains Hudson Bay
 Mississippi River Mount McKinley Pacific Ocean Rocky Mountains Sierra Nevada Vancouver Island

On the map below, 12 states, provinces, or territories of the region are numbered from 13 to 24. Their names are listed in the Answer Bank. Write the name of each place on the line next to each number.



Answer Bank Alaska Alberta Arizona Georgia Michigan Montana New York Nunavut
 Ontario Oregon Prince Edward Island Quebec

Use the information and skills you learned from the Mapping Lab to answer Questions 25–30.

25. What is the most common type of vegetation in the central area of both southern Canada and the United States?

- A. temperate grasslands
- B. desert scrub
- C. deciduous forest
- D. coniferous forest

26. Which of the following is the largest urban center in Canada?

- A. Calgary
- B. Montreal
- C. Toronto
- D. Vancouver

27. Which resource is most abundant in Texas, Alaska, and Alberta?

- A. coal
- B. hydroelectric power
- C. petroleum
- D. precious metals

Use the ^{atlas}~~transparency from teacher's projecting~~ to help answer Questions 28–30.

28. Which of these climate zones covers most of Canada?

- A. subarctic
- B. humid continental
- C. marine west coast
- D. tundra

29. Which of these states, provinces, or territories is **mostly** located in a tundra climate zone?

- A. Alaska
- B. Ontario
- C. Nunavut
- D. Quebec

30. Which of these places has a humid continental climate?

- A. Florida
- B. Massachusetts
- C. Prince Edward Island
- D. Texas